



basic education

Department:
Basic Education
REPUBLIC OF SOUTH AFRICA

NATIONAL SENIOR CERTIFICATE

GRADE 12

CIVIL TECHNOLOGY: CIVIL SERVICES

NOVEMBER 2018

MARKING GUIDELINES

MARKS: 200

These marking guidelines consist of 18 pages.

QUESTION 1: OHSA, MATERIALS, TOOLS, EQUIPMENT AND JOINING (GENERIC)

1.1

- | | | |
|-------|-----|-----|
| 1.1.1 | F ✓ | (1) |
| 1.1.2 | A ✓ | (1) |
| 1.1.3 | G ✓ | (1) |
| 1.1.4 | E ✓ | (1) |
| 1.1.5 | B ✓ | (1) |

1.2

- Do not throw any tools or materials from a scaffold. ✓
- Never jump on to and off a scaffold. ✓
- Never overload a scaffold.
- Remove or cover sharp edges or corners.
- Always attach free-standing scaffoldings to a building.
- Use a ladder to get on and off a scaffold.
- Keep free of waste or any other obstruction.
- Never jump on a scaffold while working on it.
- Responsible/qualified person must ensure that scaffolding is safe, rigid, stable and firm or has no defects.
- Scaffold must be supplied with guard rails/toe boards.
- Scaffolds must be levelled on uneven ground.
- Do not work on a scaffold in bad weather.
- Wear a safety harness when working on scaffolding.
- Do not throw tools on/off a scaffold.

ANY TWO OF THE ABOVE (2)

1.3

- It prevents workers from falling off the scaffold. ✓
- It is used as a handrail. ✓
- It is used to strap on safety harnesses.
- To protect the worker working on the scaffold.

ANY TWO OF THE ABOVE (2)

1.4

- The primary purpose of painting is to protect metals, wood and other material against corrosion and decay. ✓
- Provides a decorative/aesthetic appearance/finishing. ✓
- Protects surfaces from moisture penetration.
- Protects surfaces from rust/uv rays.

ANY TWO OF THE ABOVE (2)

- 1.5 The curing of concrete:
- Increases the strength of concrete. ✓
 - Decreases the permeability of hardened concrete.
 - Improves durability of concrete by reducing cracks.
 - Makes concrete more watertight.
 - Minimises shrinkage cracks in concrete.
 - Provides volume stability.
 - Cured concrete can carry more weight without breaking/crumbling than uncured concrete.
 - Prevents rapid drying of concrete.
 - Curing ensures that the hydration process continues.

ANY ONE OF THE ABOVE (1)

1.6

- 1.6.1 Multi detector ✓ (1)

- 1.6.2 Tool A is used:
- to detect materials found in/behind walls, ceilings and underneath floors, including ferrous and non-ferrous metals, electrical wiring, wood and metal studs. ✓
 - to locate steel bars and copper pipes. ✓
 - in carpentry, plumbing, and construction.
 - to measure the distance to/from covered objects.

ANY TWO OF THE ABOVE (2)

- 1.6.3 The batteries must be removed from the tool:
- to prevent the battery from running flat/battery can die. ✓
 - to prevent acid leaks from batteries damaging the tool.

ANY ONE OF THE ABOVE (1)

1.7

- 1.7.1 A – Bolt and nut/Bolt ✓
B – Rawl bolt ✓ (2)

- 1.7.2 **Bolt and nut**
- Bolts and nuts are used to secure pipe supports to metal parts. ✓
 - To join components together.
- Rawl bolt**
- A Rawl bolt is used to fix a truss hanger to a wall. ✓
 - To fix brackets/structures/panels to a wall/concrete.
 - For construction, renovation and industrial work

ANY TWO OF THE ABOVE (2)
[20]

QUESTION 2: GRAPHICS AS METHOD OF COMMUNICATION (GENERIC)**ANSWER SHEET 2**

NO.	QUESTIONS	ANSWERS	MARKS
1	Identify FIGURE A.	South Elevation/Elevation ✓	1
2	Identify FIGURE B.	Ground floor plan/Floorplan ✓	1
3	Identify number 4.	First floor level/Second floor level/Suspended floor/Floor level/Dash line/ FFL/Expansion joint ✓	1
4	Identify number 5.	Window Sill ✓	1
5	Identify number 9.	Hand wash basin/Wash basin/Washing basin/HWB/Basin ✓	1
6	Identify number 10.	Water closet/WC/Toilet pan ✓	1
7	Identify number 11.	Bath/B ✓	1
8	On what date was the plan printed?	2018/10/02 ✓	1
9	Who drew the building plan?	JP Maloi ✓	1
10	Name the feature in the column for the notes in FIGURE 2 that must be installed in front of the sliding door.	Ramp ✓	1
11	Name the feature in the column for the notes in FIGURE 2 that must give access to the first floor.	Staircase/Stairs/Stairway ✓	1
12	Identify the type of roof that is used for the building in FIGURE A.	Gable roof ✓	1
13	Explain the purpose of number 1.	To cover the opening/close the gap between the two slopes of the roof. ✓ Prevent water and other elements from entering the roof. ANY ONE OF THE ABOVE	1

14	Explain the purpose of number 2.	<ul style="list-style-type: none"> To prevent water from falling onto the ground ✓ To collect rainwater To channel the rainwater into the downpipe To protect the wall from water To hide the rafters/finish off the roof <p>ANY ONE OF THE ABOVE</p>	1
15	Explain the abbreviation FFL at number 6.	Finished floor level ✓	1
16	Explain the purpose of number 7.	To channel the water from the gutter to the ground. ✓	1
17	Explain the meaning of the arrow on the feature that must be installed in front of the sliding door.	It indicates the direction of the slope of the ramp/it indicates the slope. ✓	1
18	Explain what is meant by 1:10 indicated on the symbol in the notes.	It indicates the slope or the gradient of the ramp/for every 10 metres horizontally rises 1 metre vertically. ✓	1
19	Which room will feature 15 serve?	The bathroom. ✓	1
20	Explain the short dash lines on the windows.	<ul style="list-style-type: none"> Indicates what direction the window is opening/window opening. ✓ Indicates the location of the hinges. Indicates the location of the casement stay. <p>ANY ONE OF THE ABOVE</p>	1
21	Deduce the height of window 2 from the window schedule.	1,2 m or 1 200 mm ✓(Ignore units)	1
22	Deduce the width of window 3 from the window schedule.	2 m or 2 000 mm ✓(Ignore units)	1
23	On what elevation of the building is the bathroom window situated?	Western elevation/Western side ✓	1

24	Differentiate between component number 3 and component number 8 .	3 – window/window frame/reveal frame stile/casement stile ✓ 8 – sliding door /door frame/ door/reveal /sliding door stile ✓	2
25	Differentiate between the light in the lounge and the light in the bathroom.	The light in the lounge is a fluorescent light/1 x 40W/2x40/3x40 fluorescent light ✓ and the light in the bathroom is a normal ceiling light ✓	2
26	Recommend a suitable floor covering for the bathroom.	Tile/ Vinyl flooring(Novilon)/ Coloured screed/Polished or stained concrete flooring/Water proof laminated floor/carpet. ✓ ANY ACCEPTABLE ANSWER	1
27	Recommend an appropriate scale to which FIGURE A should be drawn, according to SANS.	1:50/100/200 ✓	1
28	Recommend an alternative sanitary fitment to replace number 11 that will serve a similar purpose.	Shower ✓	1
29	Calculate the internal area of the office in m ² Show ALL calculations.	4 m ✓ x 3 m ✓ = 12 m ² ✓ OR 12 4 000✓ X 3 000✓ = 12 000 000mm ²	3
30	Calculate the perimeter of the building. Show ALL calculations.	Positive marking (220 + 3 000 + 110 + 2 800 + 220) ✓ x 2 ✓ = 6 350 x 2 =12 700 mm ✓ (220 + 4 000 + 110 + 2 000 + 220) ✓ x 2 ✓ = 6 550 x 2 = 13 100 mm ✓ 12 700 + 13 100 mm = 25 800 mm ✓ OR = 25,8 m	7
		TOTAL	40

QUESTION 3: CONSTRUCTION ASSOCIATED WITH CIVIL SERVICES, OHS AND QUANTITIES (SPECIFIC)

3.1 3.1.1 A manhole is a chamber that allows entrance to a drain. ✓ (1)
Allow access to the sewage pipes of a sewage system.

ANY ONE OF THE ABOVE

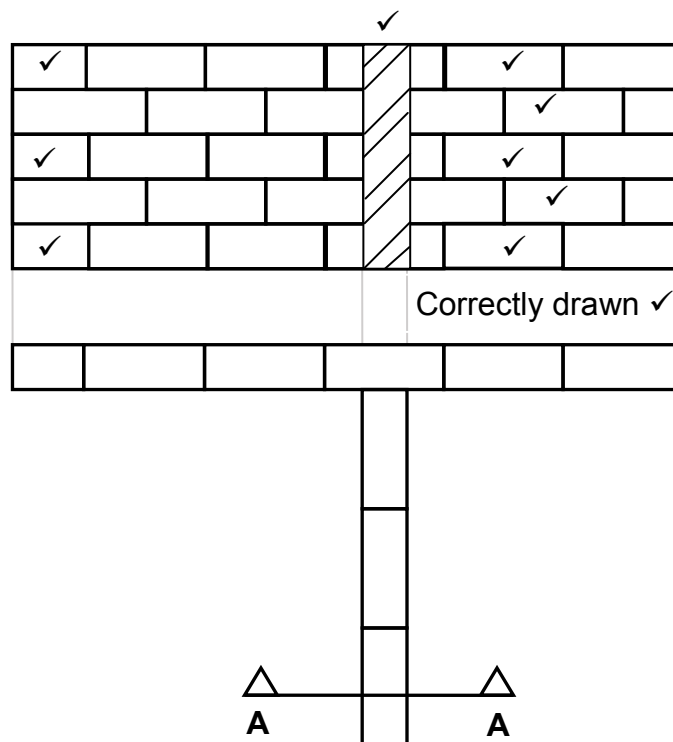
3.1.2 Benching/Sloping/Haunching ✓ (1)

3.1.3 Pipe channel/Open channel/Channel ✓ (1)

3.1.4 Manholes are set in frames and have greased double seals for the following reasons: (2)

- To make the manhole airtight. ✓
- To make the manhole watertight. ✓
- To ensure that gasses cannot escape.
- To ensure that liquids cannot escape.

3.2



ASSESSMENT CRITERIA	MARK	LEARNER MARK
FIVE courses of bricks in stretcher bond correctly drawn	5	
Alternate half bricks on left side	3	
Section correctly drawn	1	
Hatching lines	1	
TOTAL:	10	

(10)

- 3.3
- If the sides are not properly supported, no person is allowed to work in the trench. ✓
 - The supervisor ensures that no load, material or heavy machinery is placed near the edge of any excavation. ✓
 - Excavations must be adequately protected by a fence. ✓
 - Red warning lights and signs should be placed at regular intervals and be clearly visible.
 - Orange warning signals must always be visible.
 - Deep trenches should have shoring.
 - Wear a harness.
 - Any person entering an excavation trench must wear personal protective equipment.

ANY THREE OF THE ABOVE (3)

3.4 3.4.1 Shoring A ✓ (1)

3.4.2 Vertical members/poling boards are closer together. This means loose or waterlogged soil cannot filter through the openings. ✓
The loose or waterlogged soil will easily filter through the openings of B.

ANY ONE OF THE ABOVE (1)

3.5 3.5.1 Manhole ✓ (1)

3.5.2 Lifeline ✓ (1)

3.6

	A	B	C	D	
3.6.1				Volume of concrete for foundation:	
				Volume = l x b x h	
	1/	<u>1,150</u> ✓			
		<u>1,0</u> ✓			
		<u>0,125</u> ✓	<u>0,14 m³</u> ✓	<u>0,14 m³</u> of concrete is needed	(4)
3.6.2				Number of bricks needed for the manhole:	
	1/	<u>4,96</u> ✓		Centre line of wall = <u>4,96 m</u>	
		<u>1,0</u> ✓			
		<u>100</u> ✓	<u>496</u> ✓	496 bricks are needed	(4)

[30]

QUESTION 4: COLD AND HOT-WATER SUPPLY, TOOLS, EQUIPMENT AND MATERIALS (SPECIFIC)

4.1

- 4.1.1 High pressure geyser/Electrical geyser ✓ (1)
- 4.1.2 Element ✓ (1)
- 4.1.3 Gas geyser/Solar geyser/Coal/Biofuel/Wood geyser/Donkey/Solar panel ✓ (1)

4.2

4.2.1 A dripping geyser overflow may be an indication that the pressure control/relief valve/vacuum breaker is faulty/pipe joint leakage. ✓ (1)

4.2.2 If there is no hot water, one of the following may be the cause:

- No power to the geyser ✓
- Circuit breaker is faulty
- Electricity supply is interrupted
- Thermostat may be faulty
- Element may be faulty
- Blocked hot-water pipe
- No sun for solar geyser
- No gas for gas geyser

ANY ONE OF THE ABOVE

(1)

4.2.3 If water is leaking through the ceiling, one of the following may be the reason:

- Burst geyser or major leak. ✓
- Drip tray outlet pipe is blocked or overflowing.
- The drip tray may be cracked/no drip tray.
- Pipe joint leakage.





ANY ONE OF THE ABOVE

(1)

4.3

- 4.3.1 F ✓ (1)
- 4.3.2 G ✓ (1)
- 4.3.3 E ✓ (1)
- 4.3.4 D ✓ (1)
- 4.3.5 B ✓ (1)

4.4

- 4.4.1  ✓✓ (2)
- 4.4.2  ✓✓ (2)
- 4.4.3  ✓✓ OR  (2)

4.5

- Cut the damaged section from the pipe, using a pipe cutter/. ✓
 - Move the pipe slightly sideways to allow the fixing of compression fittings. ✓
 - Measure and cut the length of pipe to be replaced. ✓
 - Slip the nuts over the pipes followed by the ferrules. Push the pipes into the fittings and tighten using the correct tools. ✓
- OR**
- Dismantle the joint
 - Ensure sealing of joint (thread sealing tape) (4)
 - Replace compression joint
 - Tighten all nuts properly
 - Test for leaks

4.6

- 4.6.1 P-Trap/Water trap ✓ (1)
- 4.6.2 PVC/Plastic/Rubber ✓ (1)
- 4.6.3 B ✓ (1)
- 4.6.4 The seal will ensure a watertight seal and prevent it from leaking. ✓ (1)

4.7

- 4.7.1 A Bibcock/Bib tap ✓ (1)
- B Stopcock/Stop tap ✓ (1)
- 4.7.2 A A bibcock can be used for sanitary fittings such as kitchen sinks, wash troughs, washbasins, dishwashers, washing machine, fridges, ice machines and baths. ✓ (1)
Outside of a house for hose pipes.

ANY ONE OF THE ABOVE

- B A stopcock is used to close or shut off the water supply. ✓ (1)

- 4.7.3
- Plastic taps do not have the same resale value ✓ as brass taps and is therefore not worth stealing/cheaper.
 - Plastic taps are cheaper than brass taps. (1)
- 4.8
- To enable local authorities/consumer to calculate the amount of water consumed by a household. ✓
 - To indicate if there is a leakage in water pipes.
 - To enable the user to upload pre-paid water coupons. (1)
- 4.9
- 4.9.1 Description of dezincification:
- Dezincification is the selective leaching of zinc from copper alloys. ✓
 - It is an electrochemical reaction between zinc and water. ✓ (2)
- 4.9.2 Problems caused:
- Zinc gradually dissolves from the surface of an alloy. ✓
 - The material that remains is a weak, spongy copper layer. ✓
 - It can progress through the part/fitting, causing leaks. ✓
 - It can form blockages if it forms a deposit. (3)
- ANY THREE OF THE ABOVE**
- 4.10 Electrolytic cleaning/chemicals/scrubbing with wire brush/sand paper. ✓ (1)
- 4.11 Hydro-dynamic energy ✓ (1)
- 4.12
- Drain cleaning rods ✓
 - Jetting machine/drain cleaning machine/plunger
- ANY ONE OF THE ABOVE** (1)
- 4.13 Compressed-air test apparatus ✓ (1)

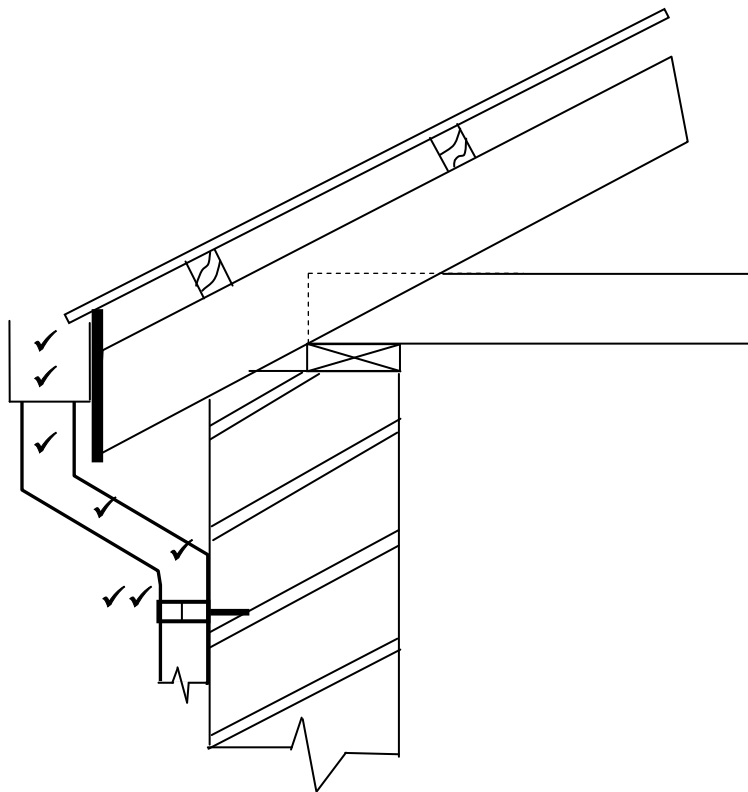
[40]

QUESTION 5: GRAPHICS AS MEANS OF COMMUNICATION, ROOF WORK AND STORM WATER (SPECIFIC)

5.1

- 5.1.1 Stop end ✓ (1)
- 5.1.2 Pitch of the roof ✓ (1)
- 5.1.3 Galvanised sheet metal ✓ (1)
- 5.1.4 Gutter ✓ (1)
- 5.1.5 Kerb ✓ (1)

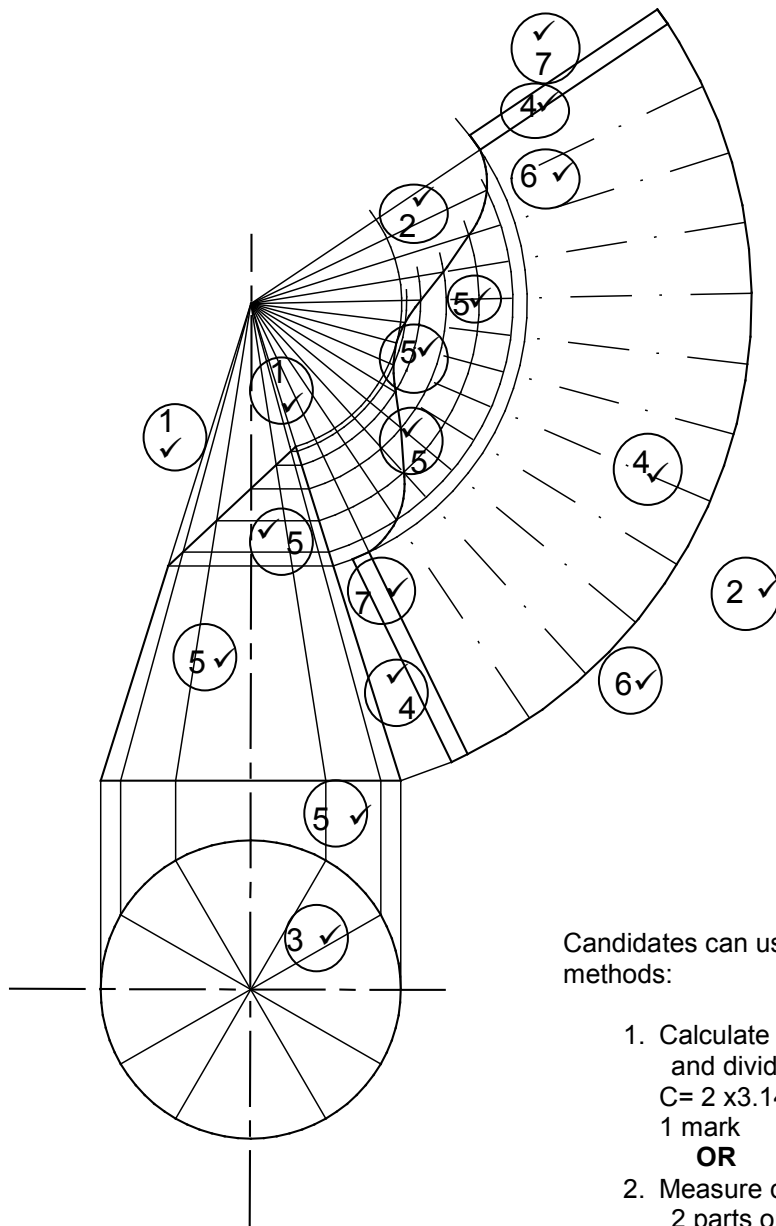
5.2



ASSESSMENT CRITERIA	MARK	LEARNER MARK
Square gutter	2	
Downpipe with offset	3	
Holder bat	2	
TOTAL:	7	

(7)

5.3



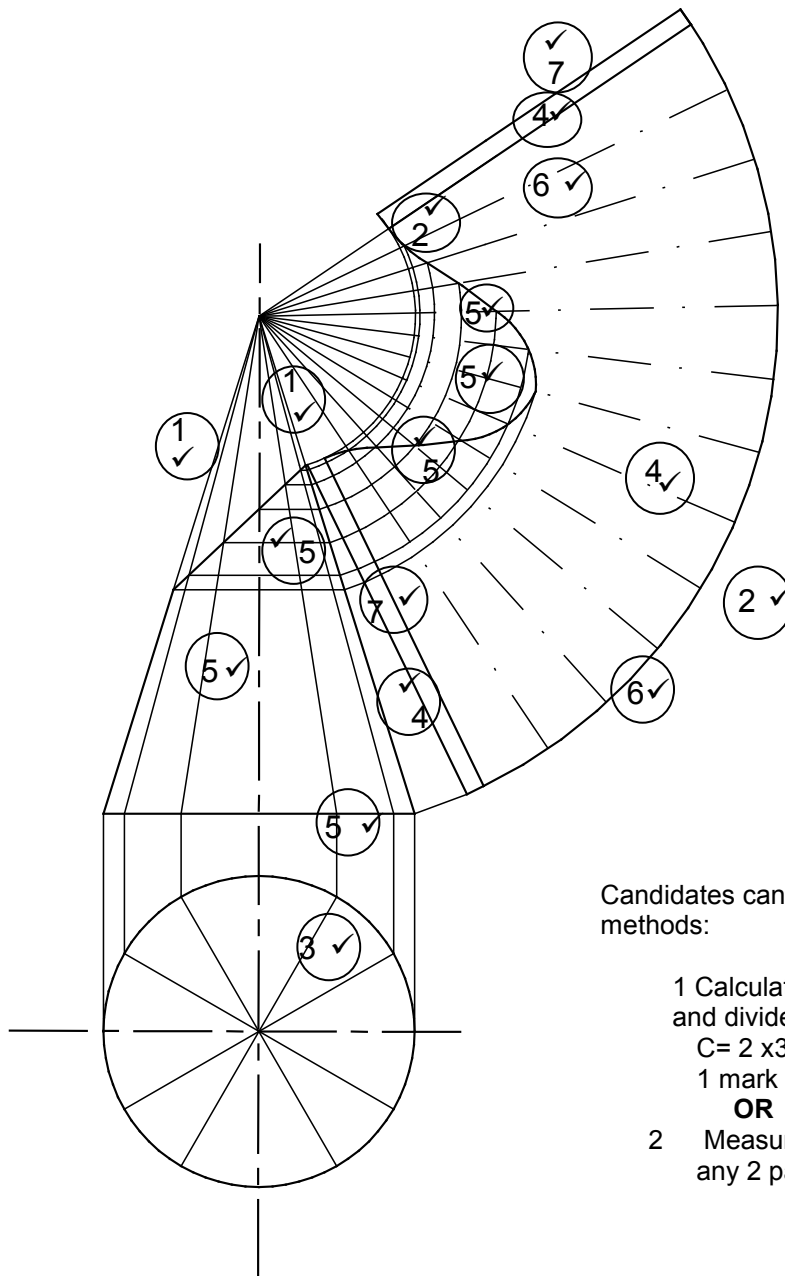
Candidates can use any one of the 2 methods:

1. Calculate the circumference and divide by 12
 $C = 2 \times 3.14 \times 25 = 157/12 = 13$
 1 mark
OR
2. Measure distance between any 2 parts on top view(circle)

ASSESSMENT CRITERIA		MARK	CM
Construction lines to top of cone	1	2	
Construction lines of outer circle	2	2	
Divide outer circle in 12 parts	3	1	
Construction lines from top of cone to outer circle	4	3	
Cone measurement (marked/transferred) from front view to determine top part of development (ONE mark for every FOUR coordinates = 3)	5	6	
Outside lines of development	6	2	
3 mm seam on both sides	7	2	
TOTAL:		18	

OR

5.3



Candidates can use any one of the 2 methods:

1 Calculate the circumference and divide by 12
 $C = 2 \times 3.14 \times 25 = 157/12 = 13$
 1 mark

OR

2 Measure distance between any 2 parts on top view(circle)

ASSESSMENT CRITERIA		MARK	CM
Construction lines to top of cone	1	2	
Construction lines of outer circle	2	2	
Divide outer circle in 12 parts	3	1	
Construction lines from top of cone to outer circle	4	3	
Cone measurement (marked/transferred) from front view to determine top part of development	5	6	
Outside lines of development	6	2	
3 mm seam on both sides	7	2	
TOTAL:		18	

[30]

QUESTION 6: SEWERAGE, SANITARY FITTINGS AND JOINING (SPECIFIC)

6.1

- 6.1.1 B ✓ (1)
- 6.1.2 A ✓ (1)
- 6.1.3 A ✓ (1)
- 6.1.4 C ✓ (1)
- 6.1.5 B ✓ (1)

6.2

6.2.1 C Waste junction 135°/Y-junction 135° ✓ (1)

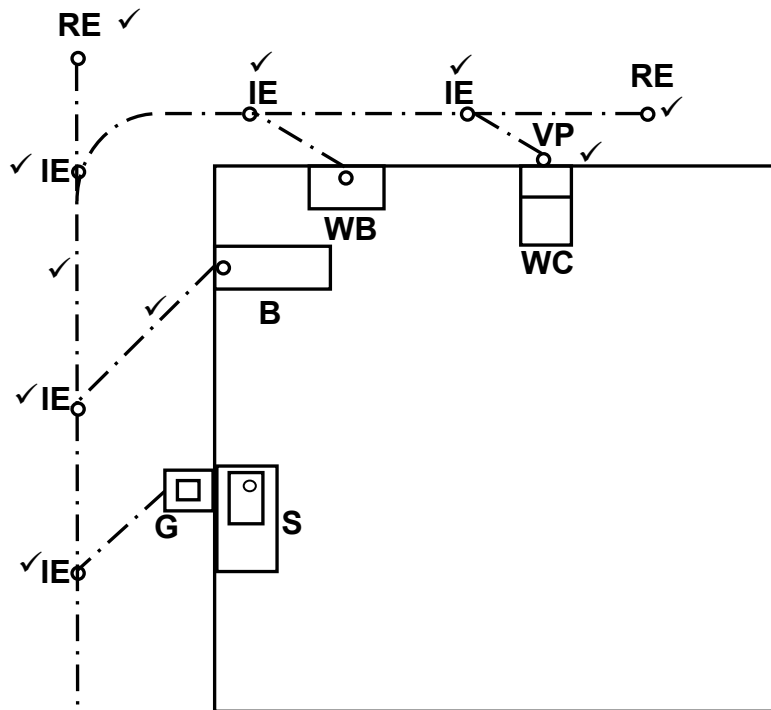
- 6.2.2
- To allow access to the drainage system. ✓
 - To remove blockages from the drainage system.

ANY ONE OF THE ABOVE (1)

- 6.2.3
- So that drain rods can be inserted easily into the pipe with the direction of flow. ✓
 - A 90° junction at this point will make it impossible to use drain rods.
 - A 90° junction will damage the main sewerage pipe if drain rods are forced into the pipe.

ANY ONE OF THE ABOVE (1)

6.3



ASSESSMENT CRITERIA	MARK	CANDIDATE'S MARK
2 x rodding eyes correctly positioned	2	
5 x inspection eyes correctly positioned	5	
1 x ventilation pipe correctly positioned	1	
Drain pipes drawn correctly (Main and branch pipes)	2	
TOTAL	10	

(10)

6.4.1 15 mm ✓ (1)

6.4.2 Shower rose/head ✓ (1)

6.4.3 **To channel the water towards C.** ✓ (1)

- 6.4.4
- The shower trap allows water to flow down the drainage pipes. ✓
 - Keeps unwanted odours from entering the atmosphere.
 - To ensure that water flows to the shower trap. (1)

6.4.5 Capillary joint/Soldered joint ✓ (1)

- 6.5 The function of an anti-siphonage pipe is:
- To supply air to the short branch pipe of the lower fixture at the time of suction to prevent loss of the water seal. ✓
 - To act as a ventilation pipe for the lower fixtures.

ANY ONE OF THE ABOVE (1)

6.6 FIGURE A: Used above ground where soil pipe must bend. ✓
Where access to sewage pipes are needed/unblocking of pipes.
To join sewage pipes at 90°.

FIGURE B: Used to connect soil pipes at an angle. ✓
To join three soil pipes at an angle of 135° (2)

- 6.7
- Water closet ✓
 - Bidet
 - Urinal

ANY ONE OF THE ABOVE (1)

6.8

6.8.1  OR ✓✓ (2)

Urinal

6.8.2  ✓✓ (2)

Grease trap

6.8.3  ✓✓ (2)

Shower

6.9 Materials that are commonly used for sanitary fittings are:

- Ceramics ✓
- Cast iron ✓
- Stainless steel
- Plastic/PVC
- Pressed steel
- Terrazzo
- Glass fibre/fibreglass
- Copper/aluminium (2)

ANY TWO OF THE ABOVE

- 6.10
- 50/50 solder (plain/tinman's solder) ✓
 - Wiping solder (plumber's solder) ✓
 - 60/40 solder (fine solder)
 - Lead-free solder

ANY TWO OF THE ABOVE (2)

- 6.11 Chemical anchors can be used to:
- Mount air conditioners ✓
 - Fit outdoor lights
 - Fix brackets to walls
 - Fix brackets to secure I-beams
 - *Fix balconies*
 - *Fix railings*
 - *Repair bathrooms*

ANY ONE OF THE ABOVE

(1)

6.12

6.12.1 Rivet head ✓

(1)

6.12.2 Flange is created by the rivet gun to complete the bond between the two pieces of material/keep/secure the two parts together. ✓

(1)

[40]

TOTAL: 200