

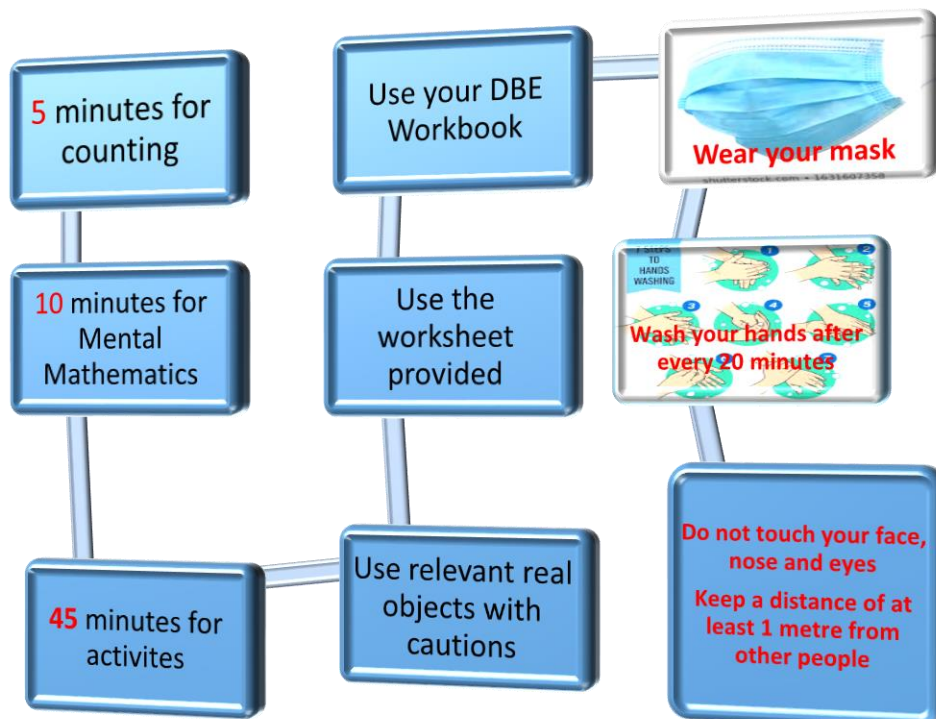
## Mathematics worksheet Term 3 2020 Week 2 content as per the trimmed ATP

Grade I

Name: \_\_\_\_\_

School: \_\_\_\_\_

Date: \_\_\_\_\_



Maths is fun

Let us enjoy



# Day 1

## Number symbols

1

2

3

4


5

6

7

### Activity 1 Counting (orally)

Look at the picture below, estimate how many objects and count them.

Objects	Estimate	Count how many?
		

### Activity 2 Mental Mathematics (written)

Counting in 1s			
Number before		Number after	
13		19	
2		9	
10		3	
15		15	
20		17	



### Activity 3 Number symbols

Read and write the missing number symbols

1	2			5	6				10
		13			16		18	19	
21	22			25				29	30

### Activity 4

Count the number of objects in each column, write the correct number symbol in the spaces provided.

Objects	Number symbol
	
	

# Day 2

# Number

# names

# One to seven

### Activity 1 Counting (practical/ oral)

Collect a handful of beans/ maize seeds or any counters. Estimate how many are they. Count them. Collect again up until you have 25 of them.




### Activity 2 Mental Mathematics (written)

Fill in the missing numbers

- 12, 13, \_\_\_\_\_, \_\_\_\_\_, \_\_\_\_\_, \_\_\_\_\_, 18
- 20, \_\_\_\_\_, 18, 17, \_\_\_\_\_, \_\_\_\_\_, 14.
- 1, 2, \_\_\_\_\_, \_\_\_\_\_, \_\_\_\_\_, \_\_\_\_\_, \_\_\_\_\_, \_\_\_\_\_, 9, \_\_\_\_\_.
- 25, 24, \_\_\_\_\_, \_\_\_\_\_, \_\_\_\_\_, \_\_\_\_\_, \_\_\_\_\_.
- 21, \_\_\_\_\_, \_\_\_\_\_, 24, \_\_\_\_\_.

### Activity 3

Complete the table below

Objects	Number symbol	Number name
		
	5	
		
		Three
		
	1	
		Two



## Activity 4

Write the number names for these numbers

1 \_\_\_\_\_

2 \_\_\_\_\_

3 \_\_\_\_\_

4 \_\_\_\_\_

5 \_\_\_\_\_

6 \_\_\_\_\_

7 \_\_\_\_\_

# Day 3 to 5

**Describe**

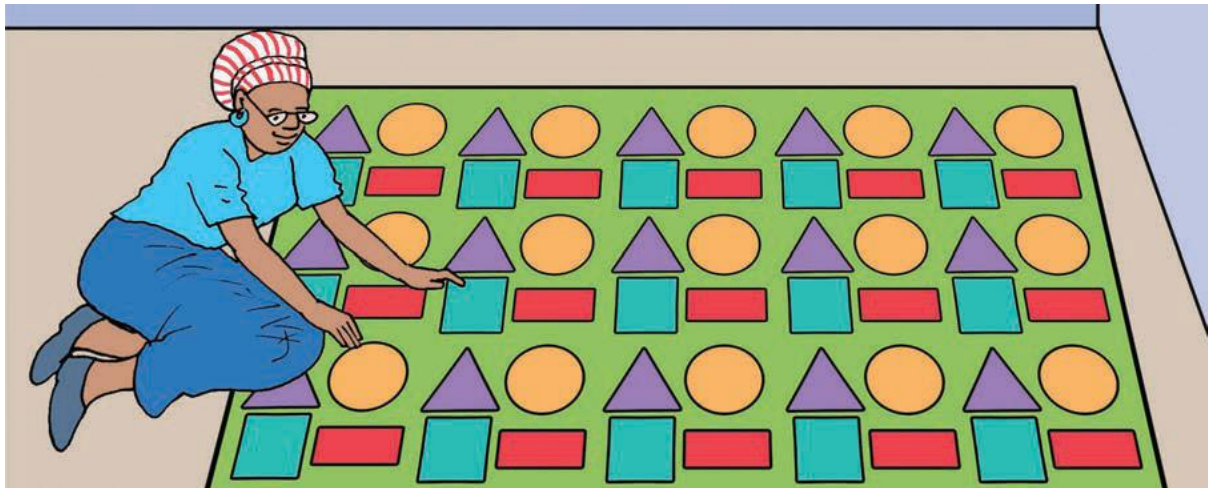
**Compare**

**Order**

**Numbers**



## Activity 1 Counting (practical/ oral)



Look at the picture above. Count the number of:

Shape	How many
Orange circles	
Red rectangles	
Blue squares	
Purple triangles	

## Activity 2 Mental Mathematics (orally)

- How many days are there in a week?
- What day is today?
- What day was yesterday?
- What day will be tomorrow?
- Which day is between Wednesday and Friday?
- 1 less than 5 is \_\_\_\_\_
- 3 less than 4 is \_\_\_\_\_
- 4 more than 1 is \_\_\_\_\_
- 2 more than 3 is \_\_\_\_\_
- 2 less than 2 is \_\_\_\_\_

### Activity 3

Order these numbers from biggest to smallest

- 9, 5, 2, 1, 4

---

- 4, 1, 7, 5, 3

---

- 7, 2, 9, 5, 6, 2

---

- 6, 9, 4, 8, 7, 2

---

- 0, 8, 10, 2, 4, 7

### Activity 4

Describe the number 7, what can you say about 7?

For example, 7 is 1 more than 6

---



---



---







---



---

### Activity 5

Use less than, more than, same as

Objects	Less than, more than, same as 7
	
	
	
	

### Activity 6

Fill in the missing numbers



### Activity 7

Write down at least 5 number bonds to 6 (numbers that make 6).

---

---

---

---

---

