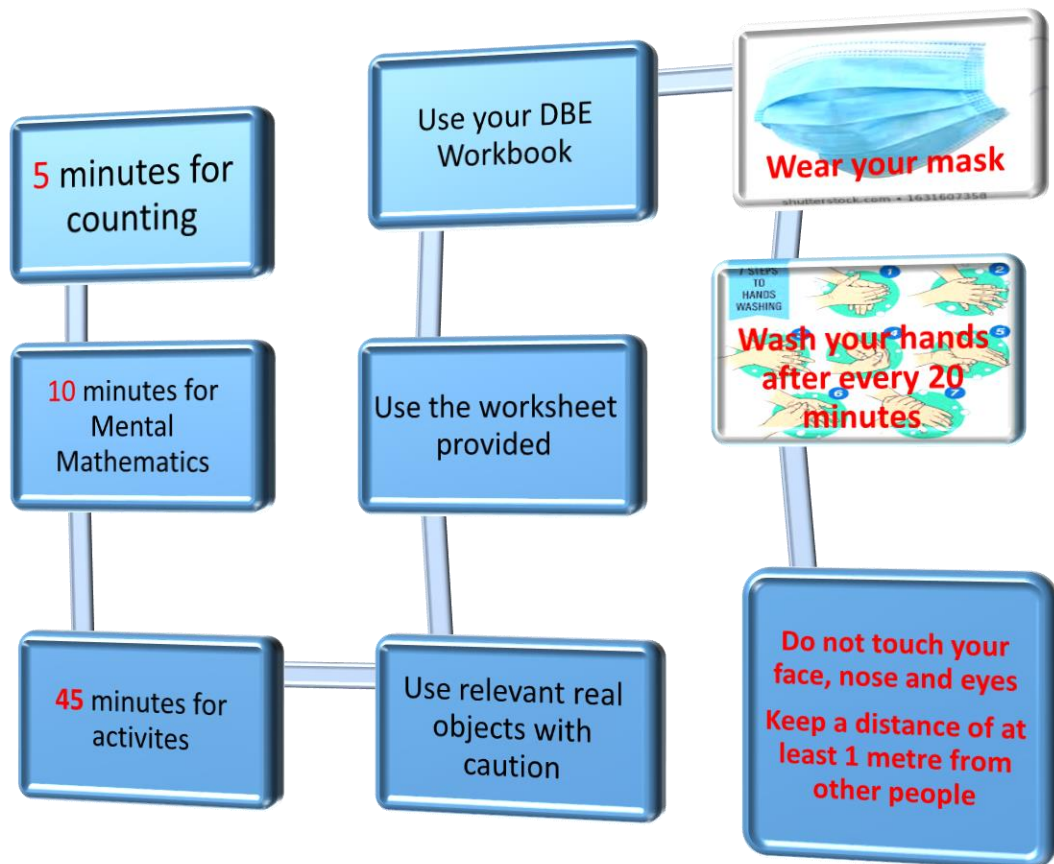



**GRADE: 2 MATHEMATICS WORKSHEETS FOR THE WEEK: 24 to 28 August 2020**

Name: \_\_\_\_\_

Date: \_\_\_\_\_



# Day 1 to Day 2

## Mass



### Activity 1 Counting (orally)

- Count forwards and backwards in 1s between 0 and 150
- Count forwards and backwards in 2s 5s 10s and 4s between 0 and 120

### Activity 2 Mental Mathematics (written)

- At what time do you go to bed?  
\_\_\_\_\_
- At what time do you wake up in the morning?  
\_\_\_\_\_
- At what time do you leave home for school?  
\_\_\_\_\_
- Do you go to school by bus, taxi or do you walk, how much time do you take when going to school?  
\_\_\_\_\_
- Which number is greater than 50 but less than 52?  
\_\_\_\_\_
- What is 3 more than 13?  
\_\_\_\_\_
- What is 5 less than 18?  
\_\_\_\_\_

### Activity 3

**Weight** 

Circle the object that is heavier.

Copyright 2006-2008 Education.com  
Created by: eDUCATION.com  
www.education.com/worksheets

### Activity 4

Order the following objects from the lightest to the heaviest

Feather, car, chair, ballon, book, paper

---

**WELL DONE YOU ARE A STAR**

# Day 3 to day 5




### Activity 1.1. Counting (orally)

- Count forwards and backwards in 1s between 0 and 150
- Count forwards and backwards in 2s 5s 10s and 4s between 0 and 120

### Activity 1.2

Let's count in 3s. Write the missing numbers on the stars



### Activity 2.1. Mental Mathematics (orally)

- Name the 7 days of the week
- Look at the month of August: how many days are there in August?
- How many weeks are there in August?
- What day of the week is the 30<sup>th</sup> of August?
- On which date did you come back to school after lockdown?
- For how many days do you go to school in a week?

### Activity 2.2

Write numbers that make bonds of 20


e.g. $15 + 5 = 20$
1.
2.
3.
4.
5.
6.
7.


### Activity 3

Look at the pictures below, tick the heavy and put a cross to the light


## Light or Heavy


Tick the Heavier one and cross the Lighter one.







---





---





© Copyright @ipLearners.com 2014. All rights reserved.

### Activity 4

Copy the table.

Estimate and then measure the mass of the following objects using bathroom scale and complete the table. Remember to complete one row at a time.

	I estimate	I measure	Difference
School bag			
Cushion			
5 books			
1 brick			
Dust bin			
Cup			




## Activity 5

Find objects at home that have the following mass, complete the table

Mass in kilograms	Item
1 kg	
2 kg	
2,5 kg	
5 kg	
10 kg	

## Activity 6

Mr Fundi is a sheep farmer. Help him find the answers to the following



1. Calculate the mass of each sheep. \_\_\_\_\_
2. Which sheep has the heaviest mass? \_\_\_\_\_
3. Which sheep have the same mass? \_\_\_\_\_
4. What is the difference between the heaviest and the lightest mass? \_\_\_\_\_

## Activity 7

DBE workbook 2 pages 120

Keep up the good work

